

# Time

## Forwards and Backwards

### Challenge Cards




twinkl



Time: Forwards and Backwards

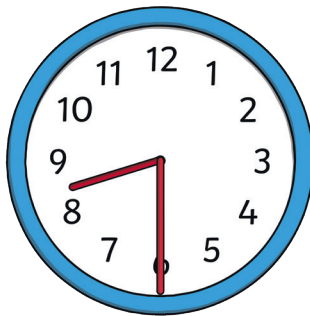
1. Tom gets up at this time:



On Saturday, he gets up half an hour later.  
What time will that be?

Time: Forwards and Backwards


2. Samantha left her house at this time:



It takes her one hour to get to work.  
What time will that be?

Time: Forwards and Backwards

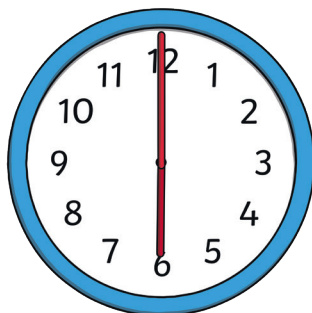
3. Marta walked her dog at this time:



She got home fifteen minutes later.  
What time was it?

Time: Forwards and Backwards

4. Hannah put a cake in the oven an hour ago. It is now this time:




What time did she put the cake in the oven?

twinkl.com

Time: Forwards and Backwards

5. Adam wants to watch a TV show at 8 o'clock. It is currently this time:




How long will he have to wait?

twinkl.com

Time: Forwards and Backwards

6. Amelia started her homework at this time:

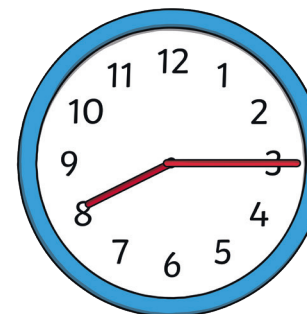


She finished half an hour later.  
What time did she finish?

twinkl.com

Time: Forwards and Backwards

7. Olek arrived at school at this time:




He set off from home fifteen minutes earlier.  
What time did he leave?

twinkl.com

Time: Forwards and Backwards

8. Molly finished swimming at this time:

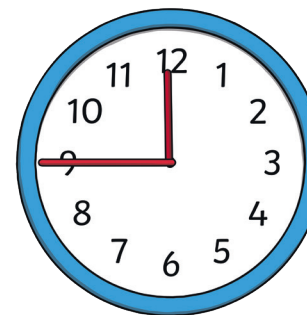


She started an hour earlier.  
What time was it?

twinkl.com

Time: Forwards and Backwards

9. It takes Isaac fifteen minutes to clean his bedroom. He started at this time:




What time will he finish cleaning?

twinkl.com

Time: Forwards and Backwards

10. Matilda worked on her art project for fifteen minutes. She finished at this time:



What time did she start?

twinkl.com

Time: Forwards and Backwards

Time Forwards and Backwards

**Answers**

- |           |          |
|-----------|----------|
| 1. 7:30   | 6. 5:30  |
| 2. 9:30   | 7. 8:00  |
| 3. 5:15   | 8. 1:00  |
| 4. 5:00   | 9. 12:00 |
| 5. 1 hour | 10. 5:15 |

twinkl.com