
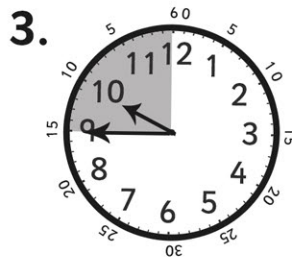
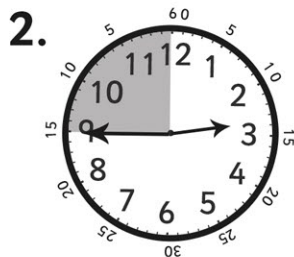



Name: .....

Date: .....

# Telling the Time - Quarter Past, Quarter to and Half Past

Are these clocks showing quarter to or quarter past?

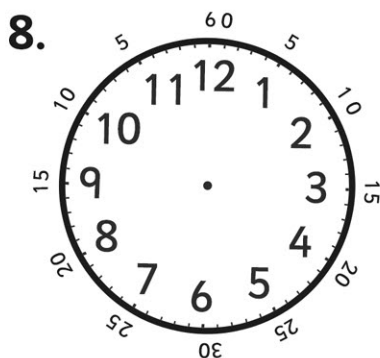


5. If the big hand starts at 12, it takes \_\_\_\_\_ minutes to get to quarter past.

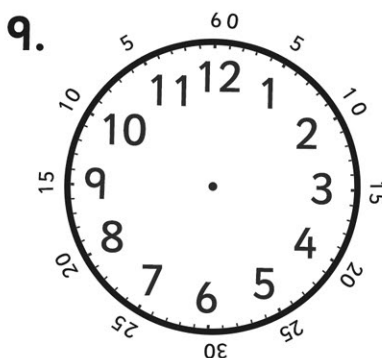
6. If the big hand starts at 12, it takes \_\_\_\_\_ minutes to get to quarter to.

7. If the big hand starts at 12, it takes \_\_\_\_\_ minutes to get to half past.

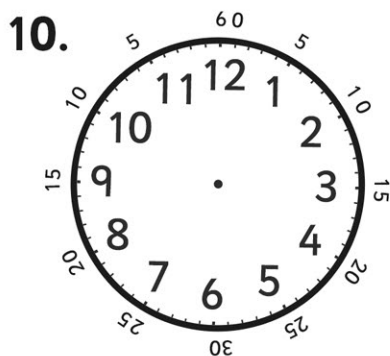
15	30	45
----	----	----



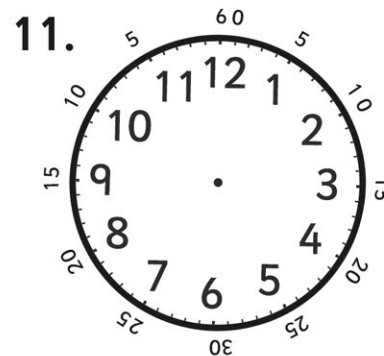
Quarter to 4



Half Past 3



Quarter Past 10



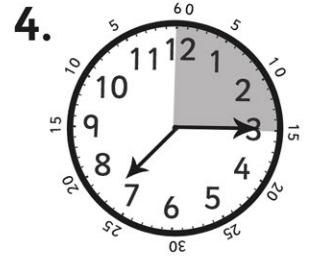
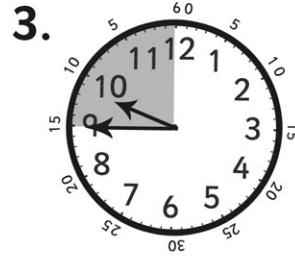
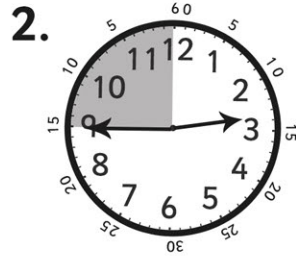

Quarter to 12

Name: .....

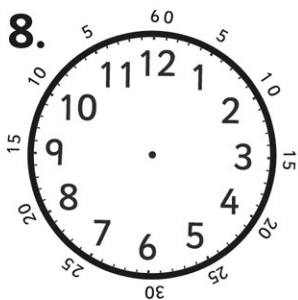
Date: .....

## Telling the Time - Quarter Past, Quarter to and Half Past

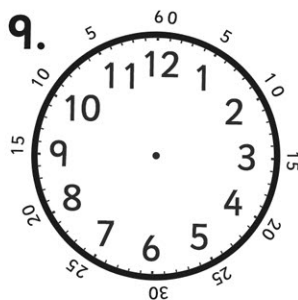
Are these clocks showing quarter to or quarter past?



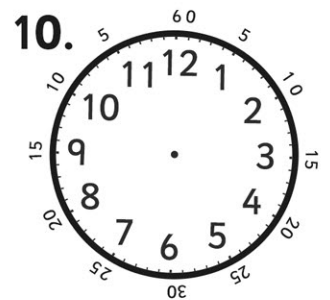
5. If the big hand starts at 12, how long does it take to get to quarter past?
6. How long would the big hand take to reach quarter to if it started from 12?
7. How long would it take to get to half past from 12?



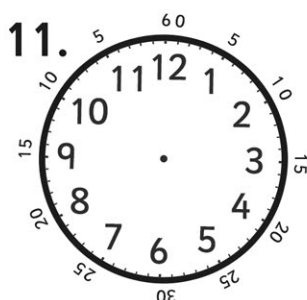
Quarter to 4



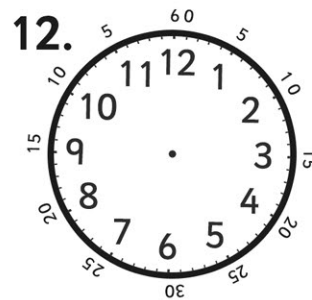
Half Past 3



Quarter Past 10



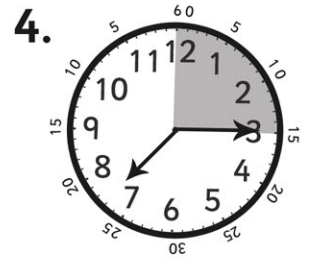
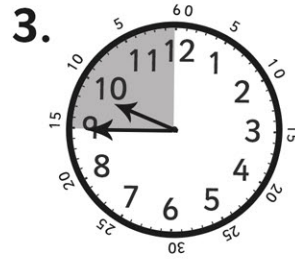
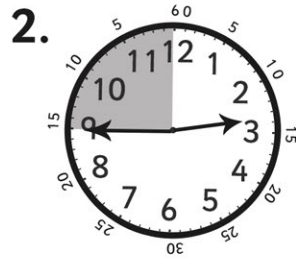

Quarter to 12



Quarter past 5

# Telling the Time - Quarter Past, Quarter to and Half Past

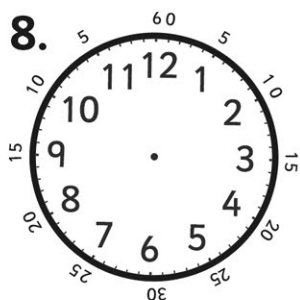
Are these clocks showing quarter to or quarter past?



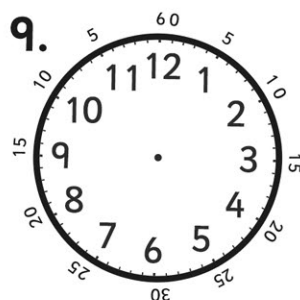
5. If the big hand starts at 12, how long does it take to get to quarter past?

6. How long would the big hand take to reach quarter to if it started from 12?

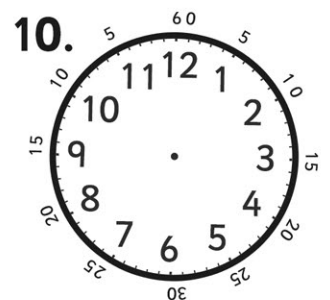
7. How long would it take to get to half past from 12?



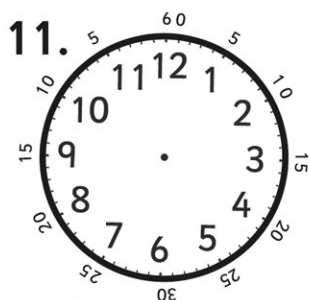
Quarter to 4



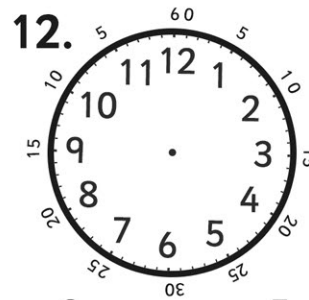
Half Past 3



Quarter Past 10

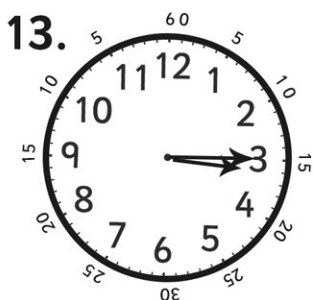


Quarter to 12




Quarter past 5

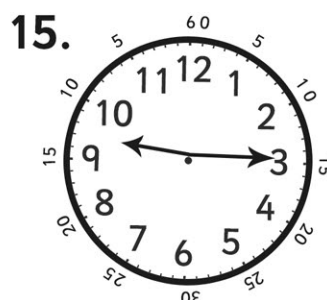
Are these sentences correct?




Quarter to 3



Half past 5



Quarter past 9



Quarter to 9