



Show Me the Money

To combine coins to make a particular value.



Colour in the coins you need to make the amount in each box.

12p



17p



24p



31p



40p



56p



65p



50p





Show Me the Money Answers

Colour in the coins you need to make the amount in each box.

12p



17p



24p



31p



40p



56p



65p



50p





Show Me the Money

To combine coins to make a particular value.



Colour in the coins you need to make the amount in each box.

12p



17p



24p



31p



50p



56p



80p



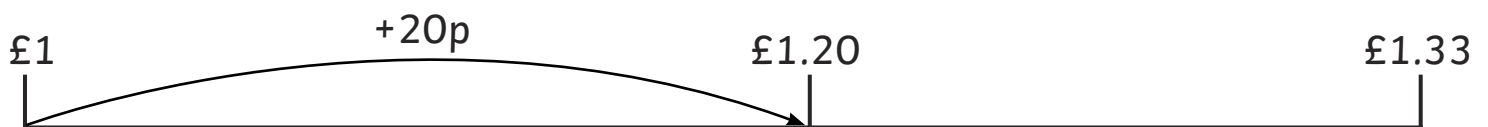
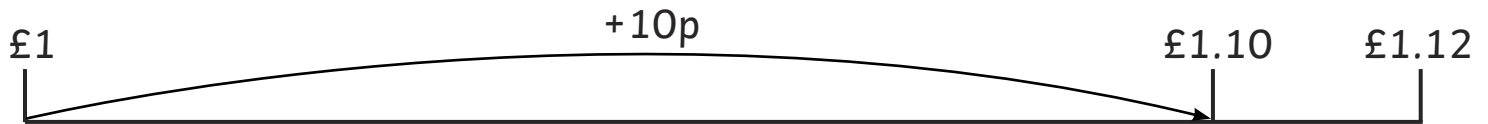
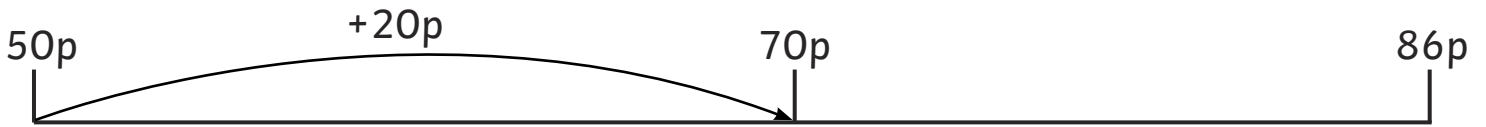
£1.70





Show Me the Money

Complete the number lines to show how you can make these values with coins.





Show Me the Money Answers

Colour in the coins you need to make the amount in each box.

12p

17p

24p

31p

50p

56p

80p

£1.70

Various answers are possible for the number line activity depending on the coins chosen.



Show Me the Money

To combine coins to make a particular value.



Draw three coins to make the amounts shown in each box.

50p

56p

80p

£1.07

£1.50

£1.11

£2.22

£4.05



Show Me the Money

Complete the number lines to show how you can make these values with coins.

94p



86p



£1.12



£1.06



£1.88



£1.33



£2.16



£3.47





Show Me the Money Answers

Draw three coins to make the amounts shown in each box.


50p




56p




80p



£1.07



£1.50




£1.11



£2.22



£4.05



Various answers are possible for the number line activity depending on the coins chosen.