






























## World Map of Koppen-Geiger Climate Classification

Here is a map of the world classified by Koppen climate type.

Can you match up any of the climate codes and types on the map with those in the table? Which climate types do you notice in the Americas?

 Af	 BWh	 Csa	 Cwa	 Cfa	 Dsa	 Dwa	 Dfa	 ET
 Am	 BWk	 Csb	 Cwb	 Cfb	 Dsb	 Dwb	 Dfb	 EF
 Aw	 BSh	 Cwc	 Cfc	 Dsc	 Dwc	 Dfc		
 BSk				 Dsd	 Dwd	 Dfd		

Peel, M. c. and Finlayson, B. L. and McMahon, T. A. (2007) (University of Melbourne). Vectorization by: Ali Zifan. Photo courtesy of (en.wikipedia.org) - granted under creative commons licence.

