







Name: \_\_\_\_\_ Class: \_\_\_\_\_



Complete the factor pairs for each number.



<b>1</b>	3 x _____ 1 x _____ 9 x _____		2 x _____ 18 x _____ 6 x _____	<b>2</b>	2 x _____ 4 x _____ 12 x _____		3 x _____ 6 x _____ 1 x _____
----------	-------------------------------------	---	--------------------------------------	----------	--------------------------------------	---	-------------------------------------

<b>3</b>	7 x _____ 1 x _____		35 x _____ 5 x _____	<b>4</b>	21 x _____ _____ x _____		3 x _____ _____ x _____
----------	------------------------	---	-------------------------	----------	-----------------------------	---	----------------------------

<b>5</b>	81 x _____ _____ x _____ _____ x _____		27 x _____ _____ x _____	<b>6</b>	_____ x _____ _____ x _____		_____ x _____
----------	--	---	-----------------------------	----------	--------------------------------	---	---------------

Now pick some numbers of your own and find the factor pairs.  
Can you find a number with more than 10 factor pairs?

<b>a</b>	_____ x _____ _____ x _____ _____ x _____		_____ x _____ _____ x _____ _____ x _____	<b>b</b>	_____ x _____ _____ x _____ _____ x _____		_____ x _____ _____ x _____ _____ x _____
----------	---	---	---	----------	---	---	---

<b>c</b>	_____ x _____ _____ x _____ _____ x _____		_____ x _____ _____ x _____ _____ x _____	<b>d</b>	_____ x _____ _____ x _____ _____ x _____		_____ x _____ _____ x _____ _____ x _____
----------	---	---	---	----------	---	---	---

<b>e</b>	_____ x _____ _____ x _____ _____ x _____		_____ x _____ _____ x _____ _____ x _____	<b>f</b>	_____ x _____ _____ x _____ _____ x _____		_____ x _____ _____ x _____ _____ x _____
----------	---	---	---	----------	---	---	---

